

Name \_\_\_\_\_

Story Problems

Mixed practice to 14


## At the Snack Shack



Read.



Draw a picture.

Solve.



- A. Lex buys 14  muffins.  
He gives 8  muffins away.  
How many muffins are left?





\_\_\_\_\_ muffins

- B. Lee buys 6  juice boxes.  
Lynn buys 7  juice boxes.  
How many juice boxes do they  
buy in all?


\_\_\_\_\_ juice boxes

- C. Lori eats 9  blueberries.  
She eats 4  strawberries.  
How many berries does she  
eat in all?



\_\_\_\_\_ berries

- D. Li buys 13  ice pops.  
8  ice pops melt.  
How many ice pops are left?

\_\_\_\_\_ ice pops

- E. Lisa buys 11  pizza slices.  
She and her friends eat 5  
slices.  
How many slices are left?

\_\_\_\_\_ slices

- F. Leroy buys 5 red  apples.  
He buys 5 green  apples.  
How many apples does he  
buy in all?

\_\_\_\_\_ apples

**Bonus Box:** On the back of this page, write and solve a story problem about 10 hamburgers.  
Draw a picture to go with your problem.