

Name : \_\_\_\_\_

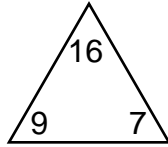
Score : \_\_\_\_\_

Teacher : \_\_\_\_\_

Date : \_\_\_\_\_

## Complete Each Family of Facts

1 )



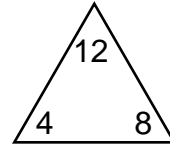
$$\square + \square = \square$$

$$\square + \square = \square$$

$$\square - \square = \square$$

$$\square - \square = \square$$

4 )



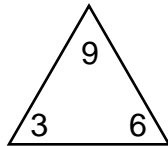
$$\square + \square = \square$$

$$\square + \square = \square$$

$$\square - \square = \square$$

$$\square - \square = \square$$

2 )



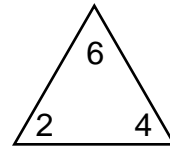
$$\square + \square = \square$$

$$\square + \square = \square$$

$$\square - \square = \square$$

$$\square - \square = \square$$

5 )



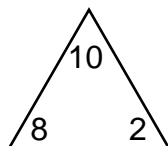
$$\square + \square = \square$$

$$\square + \square = \square$$

$$\square - \square = \square$$

$$\square - \square = \square$$

3 )



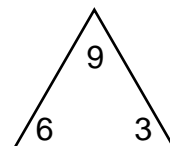
$$\square + \square = \square$$

$$\square + \square = \square$$

$$\square - \square = \square$$

$$\square - \square = \square$$

6 )



$$\square + \square = \square$$

$$\square + \square = \square$$

$$\square - \square = \square$$

$$\square - \square = \square$$

Name : \_\_\_\_\_

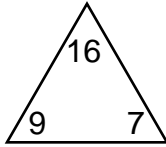
Score : \_\_\_\_\_

Teacher : \_\_\_\_\_

Date : \_\_\_\_\_

## Complete Each Family of Facts

1 )



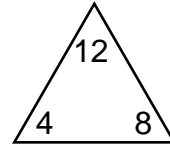
$$\boxed{9} + \boxed{7} = \boxed{16}$$

$$\boxed{7} + \boxed{9} = \boxed{16}$$

$$\boxed{16} - \boxed{7} = \boxed{9}$$

$$\boxed{16} - \boxed{9} = \boxed{7}$$

4 )



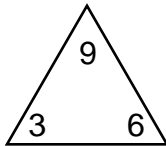
$$\boxed{4} + \boxed{8} = \boxed{12}$$

$$\boxed{8} + \boxed{4} = \boxed{12}$$

$$\boxed{12} - \boxed{8} = \boxed{4}$$

$$\boxed{12} - \boxed{4} = \boxed{8}$$

2 )



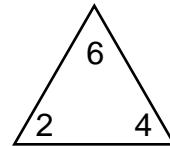
$$\boxed{3} + \boxed{6} = \boxed{9}$$

$$\boxed{6} + \boxed{3} = \boxed{9}$$

$$\boxed{9} - \boxed{6} = \boxed{3}$$

$$\boxed{9} - \boxed{3} = \boxed{6}$$

5 )



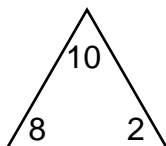
$$\boxed{2} + \boxed{4} = \boxed{6}$$

$$\boxed{4} + \boxed{2} = \boxed{6}$$

$$\boxed{6} - \boxed{4} = \boxed{2}$$

$$\boxed{6} - \boxed{2} = \boxed{4}$$

3 )



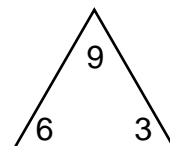
$$\boxed{8} + \boxed{2} = \boxed{10}$$

$$\boxed{2} + \boxed{8} = \boxed{10}$$

$$\boxed{10} - \boxed{2} = \boxed{8}$$

$$\boxed{10} - \boxed{8} = \boxed{2}$$

6 )



$$\boxed{6} + \boxed{3} = \boxed{9}$$

$$\boxed{3} + \boxed{6} = \boxed{9}$$

$$\boxed{9} - \boxed{3} = \boxed{6}$$

$$\boxed{9} - \boxed{6} = \boxed{3}$$