

Name : _____

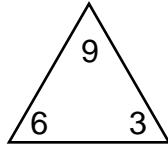
Score : _____

Teacher : _____

Date : _____

Complete Each Family of Facts

1)



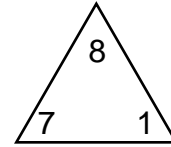
$$\square + \square = \square$$

$$\square + \square = \square$$

$$\square - \square = \square$$

$$\square - \square = \square$$

4)



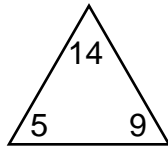
$$\square + \square = \square$$

$$\square + \square = \square$$

$$\square - \square = \square$$

$$\square - \square = \square$$

2)



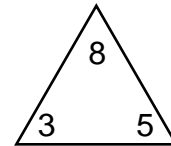
$$\square + \square = \square$$

$$\square + \square = \square$$

$$\square - \square = \square$$

$$\square - \square = \square$$

5)



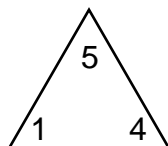
$$\square + \square = \square$$

$$\square + \square = \square$$

$$\square - \square = \square$$

$$\square - \square = \square$$

3)



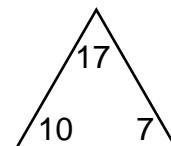
$$\square + \square = \square$$

$$\square + \square = \square$$

$$\square - \square = \square$$

$$\square - \square = \square$$

6)



$$\square + \square = \square$$

$$\square + \square = \square$$

$$\square - \square = \square$$

$$\square - \square = \square$$

Name : _____

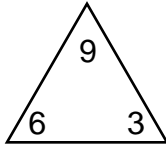
Score : _____

Teacher : _____

Date : _____

Complete Each Family of Facts

1)



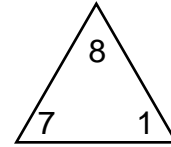
$$\boxed{6} + \boxed{3} = \boxed{9}$$

$$\boxed{3} + \boxed{6} = \boxed{9}$$

$$\boxed{9} - \boxed{3} = \boxed{6}$$

$$\boxed{9} - \boxed{6} = \boxed{3}$$

4)



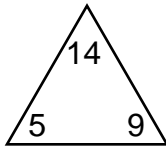
$$\boxed{7} + \boxed{1} = \boxed{8}$$

$$\boxed{1} + \boxed{7} = \boxed{8}$$

$$\boxed{8} - \boxed{1} = \boxed{7}$$

$$\boxed{8} - \boxed{7} = \boxed{1}$$

2)



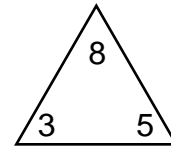
$$\boxed{5} + \boxed{9} = \boxed{14}$$

$$\boxed{9} + \boxed{5} = \boxed{14}$$

$$\boxed{14} - \boxed{9} = \boxed{5}$$

$$\boxed{14} - \boxed{5} = \boxed{9}$$

5)



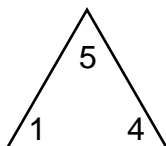
$$\boxed{3} + \boxed{5} = \boxed{8}$$

$$\boxed{5} + \boxed{3} = \boxed{8}$$

$$\boxed{8} - \boxed{5} = \boxed{3}$$

$$\boxed{8} - \boxed{3} = \boxed{5}$$

3)



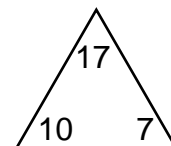
$$\boxed{1} + \boxed{4} = \boxed{5}$$

$$\boxed{4} + \boxed{1} = \boxed{5}$$

$$\boxed{5} - \boxed{4} = \boxed{1}$$

$$\boxed{5} - \boxed{1} = \boxed{4}$$

6)



$$\boxed{10} + \boxed{7} = \boxed{17}$$

$$\boxed{7} + \boxed{10} = \boxed{17}$$

$$\boxed{17} - \boxed{7} = \boxed{10}$$

$$\boxed{17} - \boxed{10} = \boxed{7}$$