

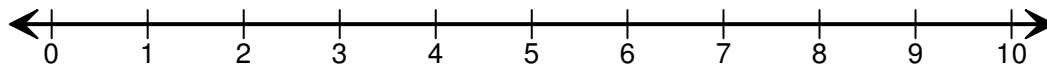
Student Name: _____

Score: _____

Subtraction Using Number Line

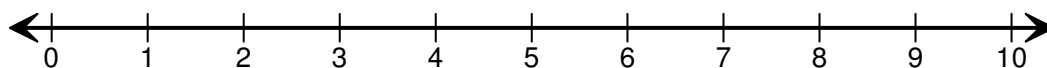
Draw hops to show the subtraction sentence and find the difference.

1)



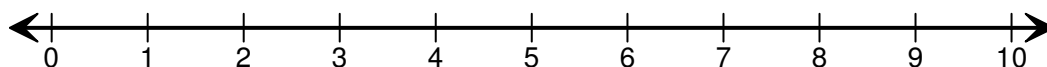
$$6 - 2 = \boxed{}$$

2)



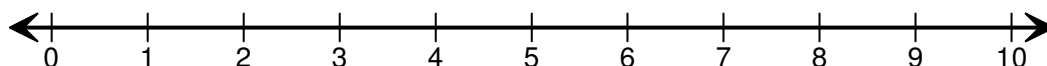
$$9 - 3 = \boxed{}$$

3)



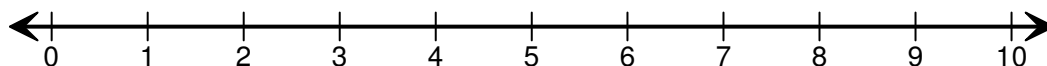
$$8 - 6 = \boxed{}$$

4)



$$10 - 3 = \boxed{}$$

5)



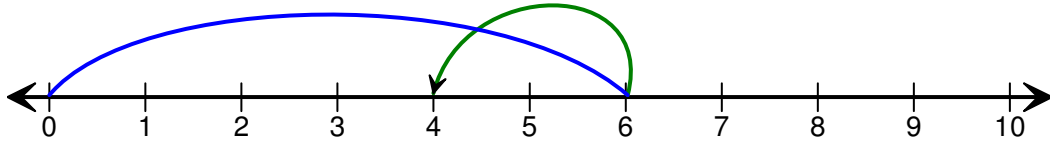
$$8 - 1 = \boxed{}$$

Student Name: _____

Score: _____

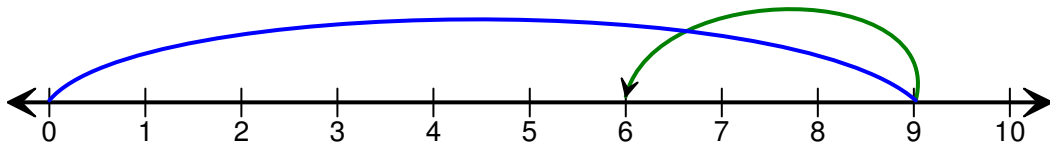
Answers:

1)



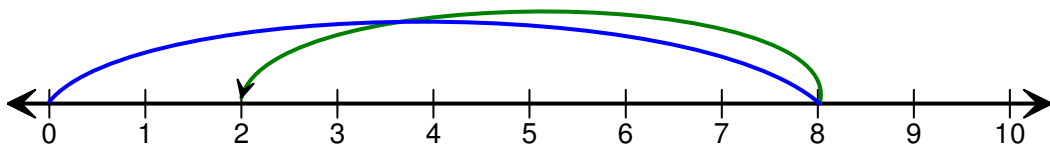
$$6 - 2 = \boxed{4}$$

2)



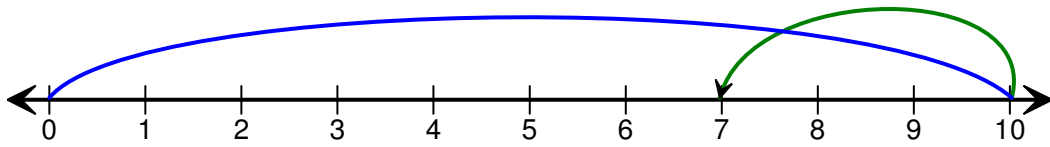
$$9 - 3 = \boxed{6}$$

3)



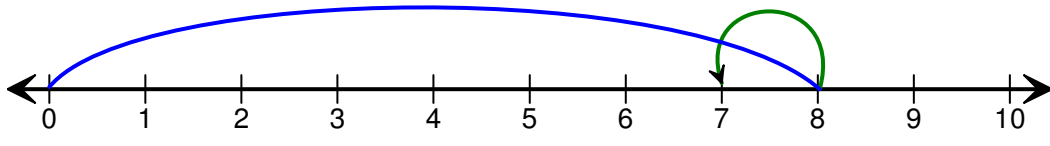
$$8 - 6 = \boxed{2}$$

4)



$$10 - 3 = \boxed{7}$$

5)



$$8 - 1 = \boxed{7}$$